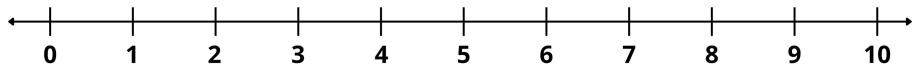


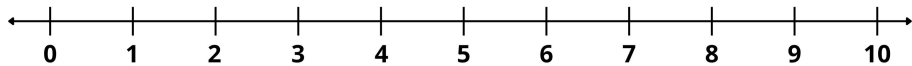
Name _____



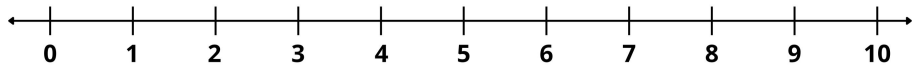
$$1 + 2 = \square$$



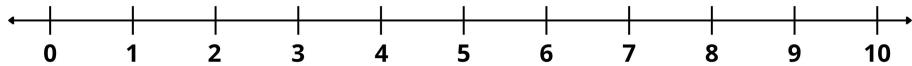
$$3 + 3 = \square$$



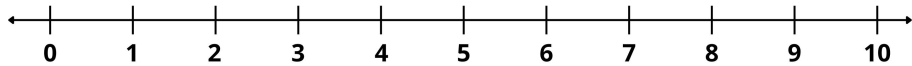
$$4 + 2 = \square$$



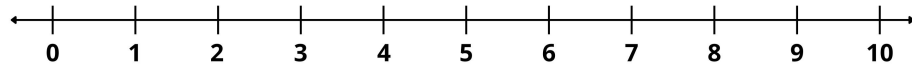
$$2 + 5 = \square$$



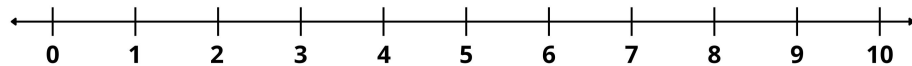
$$6 + 1 = \square$$



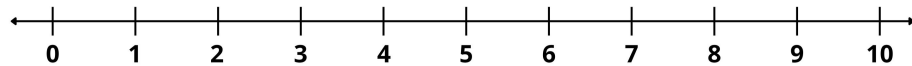
$$7 + 3 = \square$$



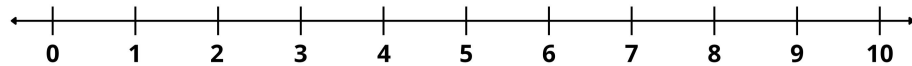
$$2 + 4 = \square$$



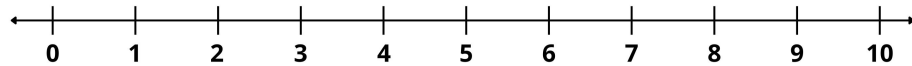
$$5 + 4 = \square$$



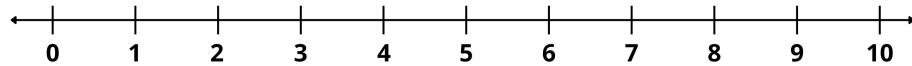
$$3 + 6 = \square$$



$$4 + 3 = \square$$



$$1 + 7 = \square$$



$$2 + 8 = \square$$

