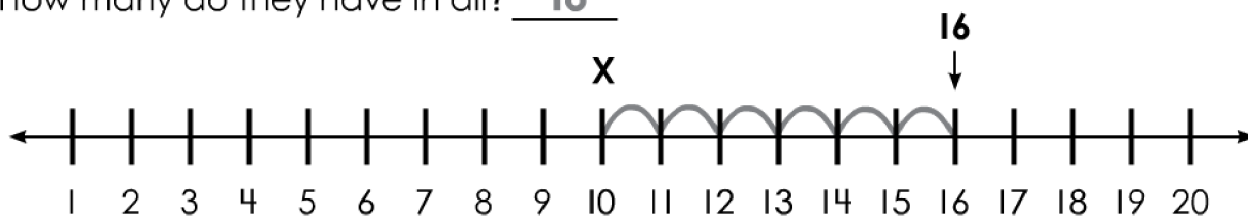


Name _____

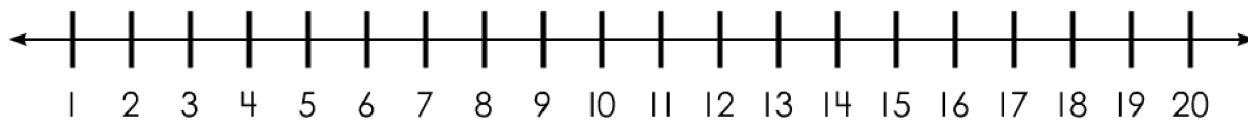
Read each story. Count on to add. Count back to subtract. Write the answer in the blank.



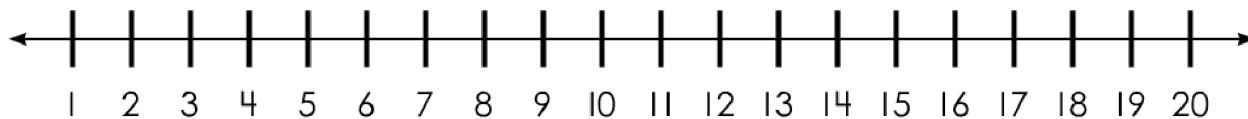
1. The Number Scouts have 10 tents in one box. They have 6 more in another box. How many do they have in all? 16



2. The Number Scouts have 18 hot dogs. The raccoons carried 3 away. How many are left? _____



3. There are 17 Number Scouts sitting around the campfire. 6 go to bed early. How many are left? _____



4. There are 6 rabbits eating carrots. 7 more join them. How many are there in all? _____

