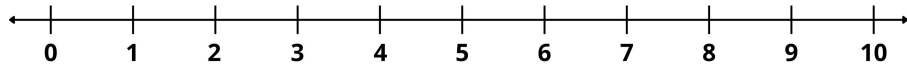


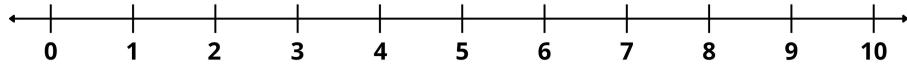
Name _____



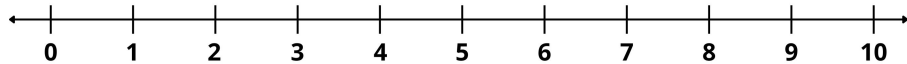
$$4 - 2 = \square$$



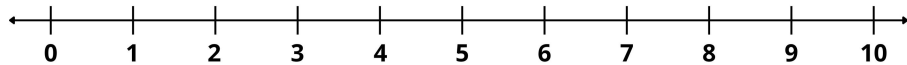
$$6 - 3 = \square$$



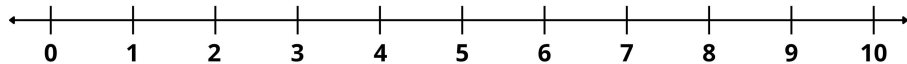
$$8 - 4 = \square$$



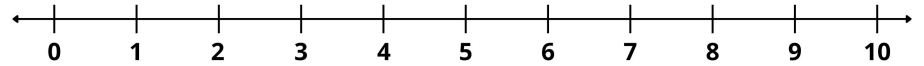
$$5 - 1 = \square$$



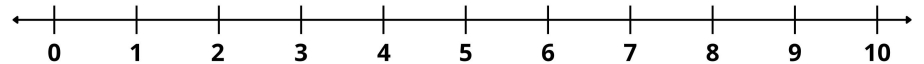
$$9 - 5 = \square$$



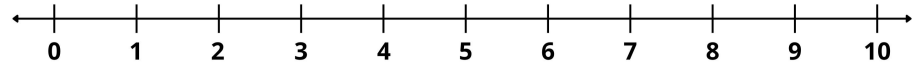
$$7 - 2 = \square$$



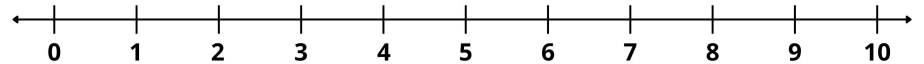
$$10 - 4 = \square$$



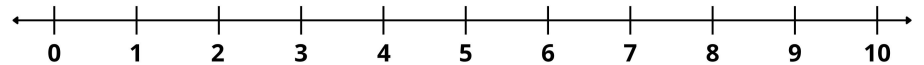
$$3 - 2 = \square$$



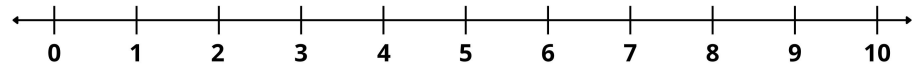
$$8 - 6 = \square$$



$$9 - 3 = \square$$



$$6 - 4 = \square$$



$$7 - 5 = \square$$

