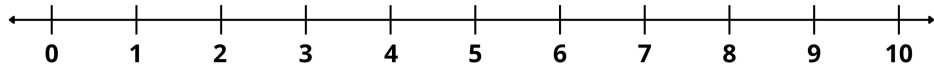


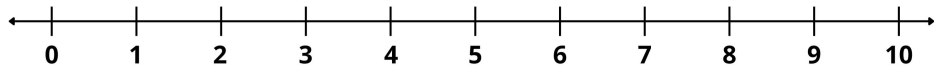
Name _____



$$10 - 2 = \square$$



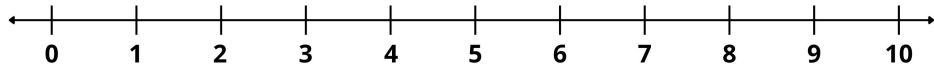
$$8 - 1 = \square$$



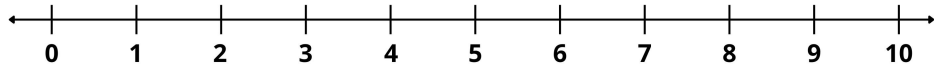
$$9 - 8 = \square$$



$$7 - 3 = \square$$



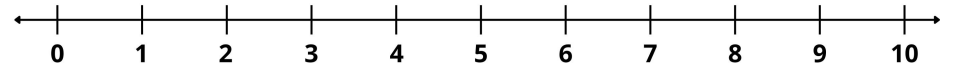
$$5 - 4 = \square$$



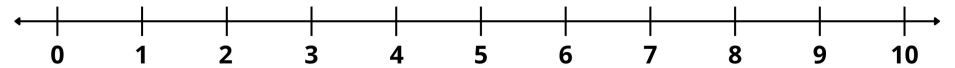
$$6 - 2 = \square$$



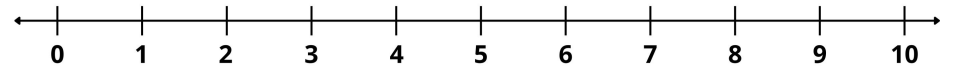
$$4 - 1 = \square$$



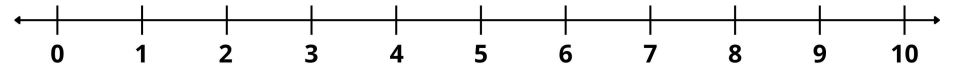
$$9 - 4 = \square$$



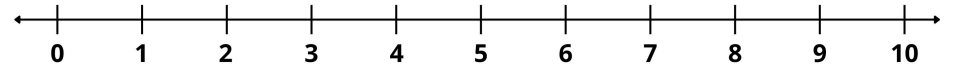
$$7 - 4 = \square$$



$$3 - 1 = \square$$



$$10 - 5 = \square$$



$$8 - 7 = \square$$