

Name \_\_\_\_\_



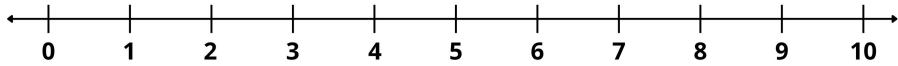
$3 + 5 = \square$



$2 + 7 = \square$



$4 + 4 = \square$



$1 + 9 = \square$



$6 + 2 = \square$



$5 + 5 = \square$



$3 + 4 = \square$



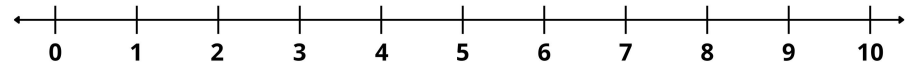
$7 + 1 = \square$



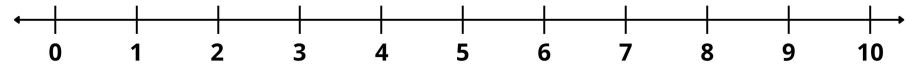
$2 + 6 = \square$



$8 + 2 = \square$



$4 + 5 = \square$



$3 + 6 = \square$

