

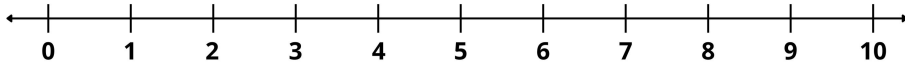
Name _____



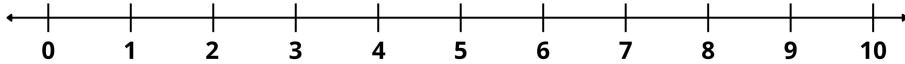
$5 - 2 = \square$



$7 - 3 = \square$



$4 - 1 = \square$



$9 - 4 = \square$



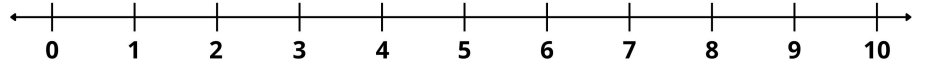
$6 - 2 = \square$



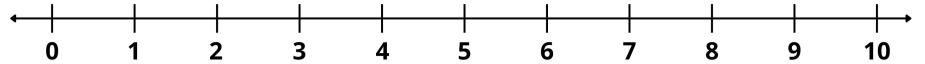
$10 - 5 = \square$



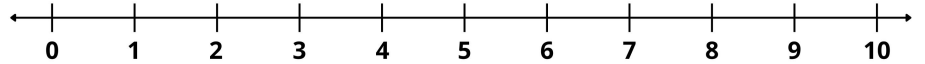
$3 - 1 = \square$



$9 - 2 = \square$



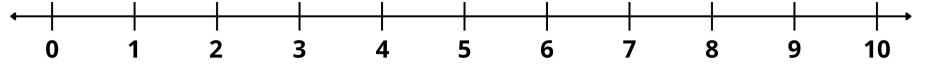
$7 - 4 = \square$



$9 - 6 = \square$



$5 - 3 = \square$



$8 - 2 = \square$