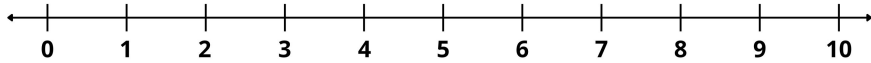
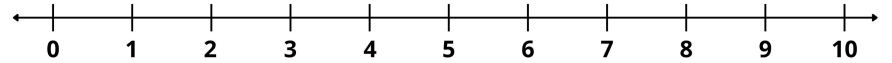


Name _____



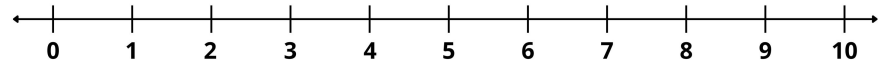
$2 + 3 = \square$



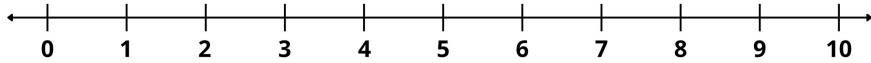
$1 + 8 = \square$



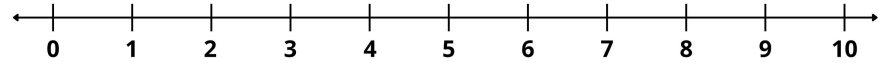
$4 + 1 = \square$



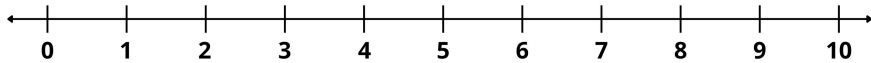
$4 + 5 = \square$



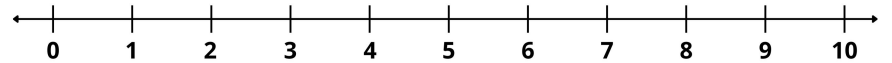
$5 + 2 = \square$



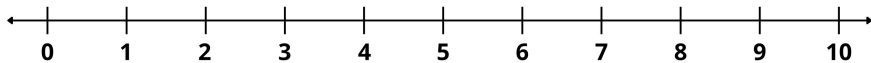
$2 + 6 = \square$



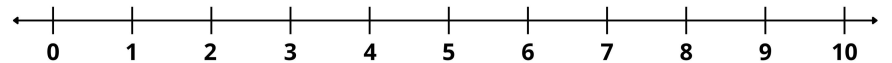
$3 + 4 = \square$



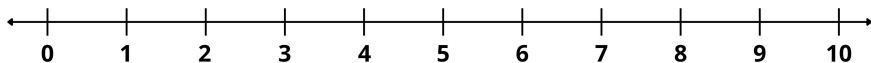
$3 + 5 = \square$



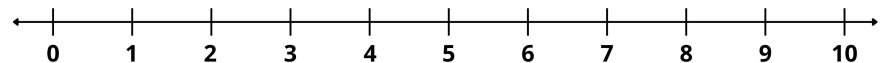
$6 + 3 = \square$



$4 + 4 = \square$



$7 + 2 = \square$



$5 + 3 = \square$