


Name _____


Telling Time analog clocks

Look at the times shown on the schedule. Draw the hour and minute hands on each clock to show the time for each activity.

1.




8:00 a.m.




eat breakfast

2.




1:45 p.m.



play with friends

3.




6:15 p.m.



read a book

4.



8:30 p.m.



go to bed