


# Name \_\_\_\_\_

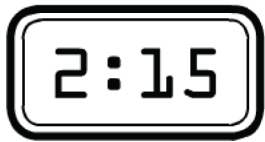

## Math Show It

Draw the Time: analog clocks


Read each sentence. Draw the hands on the clock to show the time for each event.




Ivan had breakfast at 7:25 in the morning.



He started working on his new invention at 2:15 in the afternoon.



He finished his invention at 6:10 in the evening.



He went to bed at 8:30 that night.

