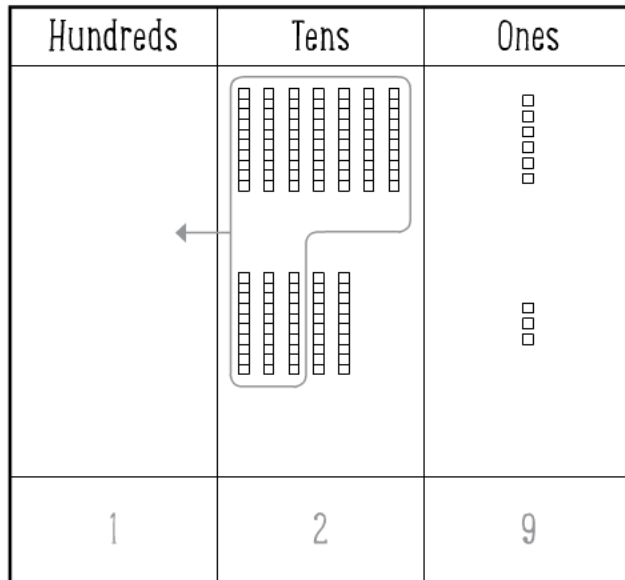


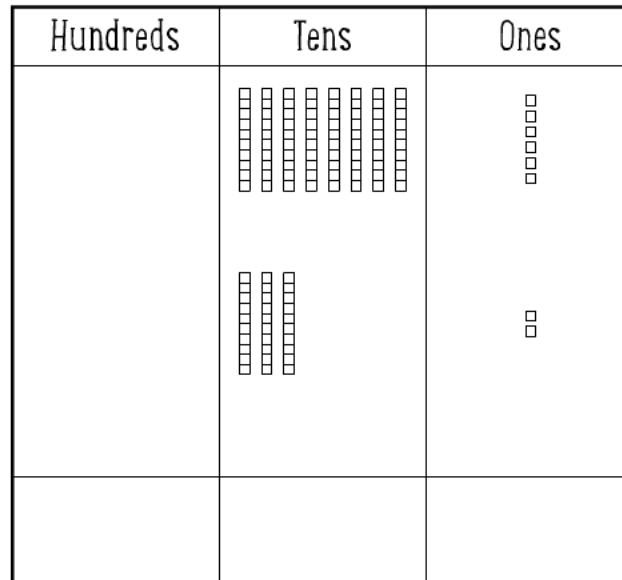
Name _____

Math
adding two-digit numbers with regrouping

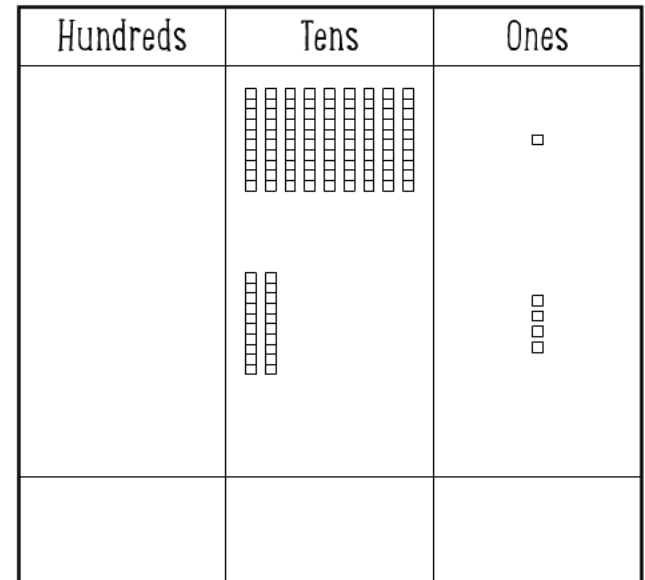
Look at each diagram. Add the ones and regroup the tens. Then use the diagram to solve the problem.
The first one has been done for you.



$$\begin{array}{r} 76 \\ +53 \\ \hline 129 \end{array}$$



$$\begin{array}{r} 86 \\ +32 \\ \hline \end{array}$$



$$\begin{array}{r} 91 \\ +24 \\ \hline \end{array}$$

Answer Key: 129; 118; 115



© Age of Learning, Inc. All rights reserved. Do not remove or alter this legal notice.
This ABCmouse.com printable may be reproduced for home or educational, noncommercial purposes only.

ABCMouse

abcmouse.com/printables