

Name _____

Math Matching
Comparing Lengths

Draw lines to match the objects that have the same lengths.

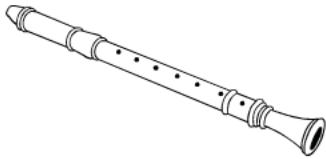
1. 2 feet



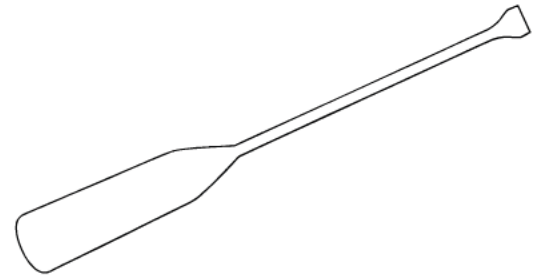
A. 1 foot



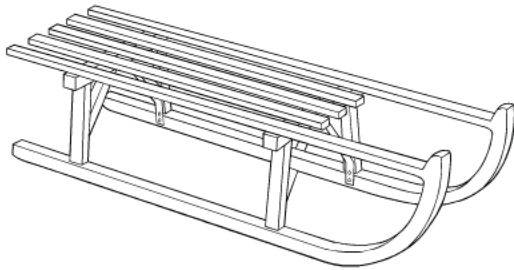
2. 12 inches



B. 48 inches



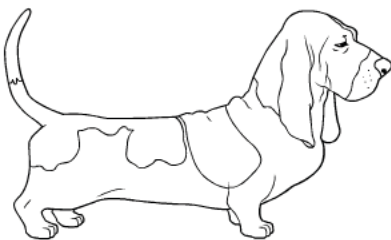
3. 4 feet



C. 3 feet



4. 36 inches



D. 24 inches



Answer Key 1. D 2. A 3. B 4. C