

Name \_\_\_\_\_




Math

Estimating Length: centimeters

One centimeter is about the width of your finger. Use that to answer these questions.

Circle the rectangle that is about 2 centimeters long.

Put an "X" next to the rectangle that is about 10 centimeters long.



Circle the rectangle that is about 15 centimeters long.

Put an "X" next to the rectangle that is about 3 centimeters long.



Can you think of any objects that are about 10 centimeters long?

Write them down here.

---

---

---