


ABCmouse.com[®]



Coin & Money Worksheets


Name _____

Math

Coins: adding within 100

Add the coins to find the sum. Write numbers under the coins as you count. Circle the sum.


1. 
10 20 30 35 40 45 46 47 48 49 50 51

2. 

3. 


Answer Key: 1. 51 2. 82 3. 63

Name _____



Name _____

Coins Coloring
piggy bank



Name _____


Math

Story Problem: coins

Read the story problem. Use the steps below to solve the problem.

Marcus and Lena want to buy a rabbit to use in their magic show. The rabbit costs 92 cents. Marcus has 2 dimes, 5 nickels, and 3 pennies. Lena has 3 dimes, 3 nickels, and 5 pennies. Do they have enough money together to buy it?

1. Show how much money the children have together.



2. Write the important numbers: _____

3. Write whether to add or subtract: _____

4. Write how many cents Marcus and Lena have altogether: _____

5. Marcus and Lena have _____ cents altogether. The rabbit costs _____ cents.

They _____ have enough money.
(do, do not)


Answer Key 1. 5 dimes, 8 nickels, 8 pennies 2. 50 and 48 3. add 4. 98 cents 5. 98 cents; 92 cents; They do have enough money.

Name _____


Look at the coins. Circle the coins that make \$1. Then, add up the rest of the coins. Write the amount on the line.
The first one is done for you.



\$1. 30



\$1. _____



\$1. _____

Answer Key: 1. \$1.30 2. \$1.75 3. \$1.60

Name _____

Math Riddle
Counting Money

Write the total value of each set of coins or bills in the blanks. Then write each letter above an answer at the bottom of the page.
Read the riddle and solve!



= \$ _____ i



= _____ ¢ I



= _____ ¢ v



= _____ ¢ a



= \$ _____ n



= \$ _____ b



= _____ ¢ e



= _____ ¢ k



= _____ ¢ r



Where does a fish keep its money?

_____ 29¢ _____ \$20 _____ 8¢


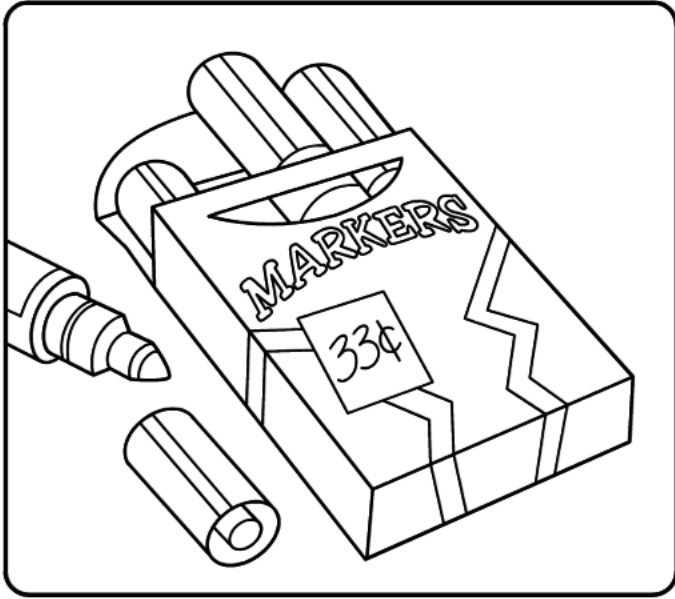
_____ 25¢ _____ \$3 _____ 62¢ _____ 35¢ _____ 25¢ _____ \$5 _____ 8¢ _____ \$20 _____ 55¢ _____ !

Answer Key 1. \$3 2. 29¢ 3. 62¢ 4. 8¢ 5. \$20 6. \$5 7. 35¢ 8. 55¢ 9. 25¢ Riddle: Where does a fish keep its money? Answer: In a riverbank!

Name _____

Show It
Money: counting coins

Cut out the coins. Glue the correct amount of coins under each sum of money.




--	--

--	--

--	--	--

--	--	--



Name _____

Coins

Cut on dashed lines (✂️-----).



When cutting the dashed lines on this printable, be sure that your child is using safety scissors designed for young children and little hands. These scissors have round tips and blunt blades so that they will cut paper, but not fingers or other objects.



Name _____

Matching Coins

1.



A.



2.



B.



3.



C.



4.



D.



5.



E.

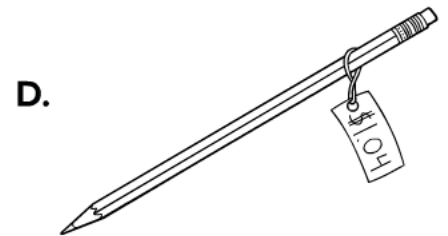
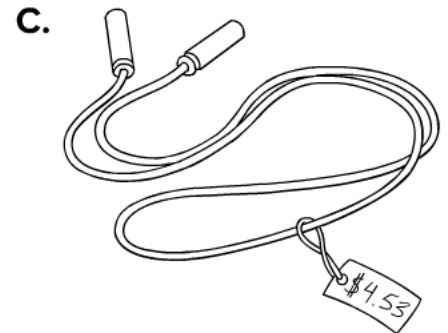





Answer Key 1. D 2. E 3. A 4. C 5. B

Name _____

Math Matching
Money: dollars and coins

Read the prices shown on the price tags. Draw lines to the dollar bills and coins that match.



Answer Key 1. C 2. D 3. A 4. B