


ABCmouse.com[®]



Hundred Chart Math Worksheets

Name _____

Color the numbers to make a picture.

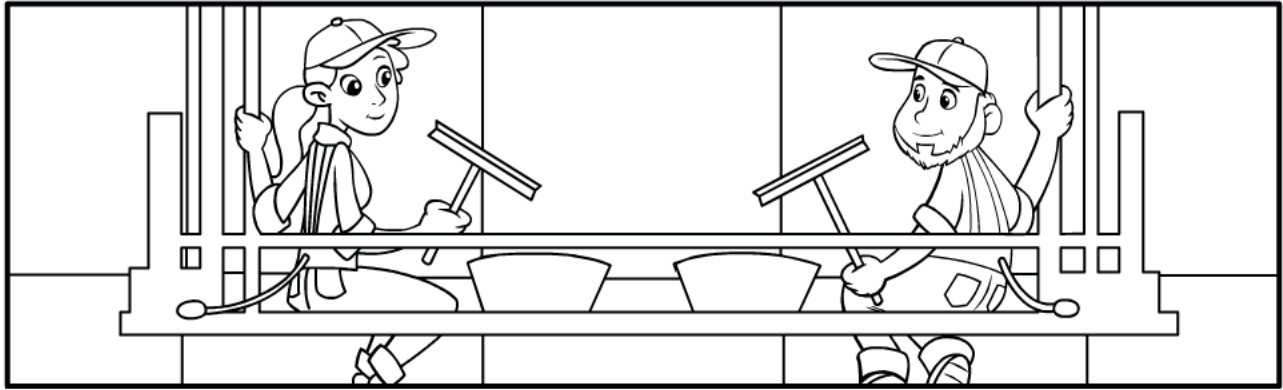
Color these numbers **pink**: 14, 16, 18, 24, 25, 26, 27, 28, 34, 35, 36, 37, 38, 45, 46, 47

Color these numbers **green**: 56, 58, 64, 66, 67, 75, 76, 86, 96

1	2	3	4	5	6	7	8	9	10
11	12	13	14	15	16	17	18	19	20
21	22	23	24	25	26	27	28	29	30
31	32	33	34	35	36	37	38	39	40
41	42	43	44	45	46	47	48	49	50
51	52	53	54	55	56	57	58	59	60
61	62	63	64	65	66	67	68	69	70
71	72	73	74	75	76	77	78	79	80
81	82	83	84	85	86	87	88	89	90
91	92	93	94	95	96	97	98	99	100

Name _____

Find the first number on the hundred chart. Count down by tens and over by ones to add the next number. Write the sum. Match the letters and the numbers to solve the riddle.



1	2	3	4	5	6	7	8	9	10
11	12	13	14	15	16	17	18	19	20
21	22	23	24	25	26	27	28	29	30
31	32	33	34	35	36	37	38	39	40
41	42	43	44	45	46	47	48	49	50
51	52	53	54	55	56	57	58	59	60
61	32	63	64	65	66	67	68	69	70
71	72	73	74	75	76	77	78	79	80
81	82	83	84	85	86	87	88	89	90
91	92	93	94	95	96	97	98	99	100

1. $13 + 23 = \underline{36}$ R
2. $21 + 32 = \underline{\quad}$ O
3. $17 + 41 = \underline{\quad}$ H
4. $73 + 15 = \underline{\quad}$ M
5. $38 + 60 = \underline{\quad}$ S
6. $78 + 11 = \underline{\quad}$ O
7. $44 + 32 = \underline{\quad}$ M
8. $11 + 83 = \underline{\quad}$ U

What kind of room can you never go into?

88 94 98 58 36 89 53 76


Answer Key 1. 36 2. 53 3. 58 4. 88 5. 98 6. 89 7. 76 8. 94 Mushroom

Name _____

Hundred Chart

Solve the Riddle

Find the first number on the hundred chart. Count up by tens and over by ones to subtract the next number. Write the difference. Match the letters and the numbers to solve the riddle.



1	2	3	4	5	6	7	8	9	10
11	12	13	14	15	16	17	18	19	20
21	22	23	24	25	26	27	28	29	30
31	32	33	34	35	36	37	38	39	40
41	42	43	44	45	46	47	48	49	50
51	52	53	54	55	56	57	58	59	60
61	62	63	64	65	66	67	68	69	70
71	72	73	74	75	76	77	78	79	80
81	82	83	84	85	86	87	88	89	90
91	92	93	94	95	96	97	98	99	100

$$\begin{array}{r} 1. \quad 76 \\ \quad - 53 \\ \hline \end{array}$$

23 b

$$\begin{array}{r} 2. \quad 84 \\ \quad - 43 \\ \hline \end{array}$$

a

$$\begin{array}{r} 3. \quad 69 \\ \quad - 32 \\ \hline \end{array}$$

r

$$\begin{array}{r} 4. \quad 24 \\ \quad - 11 \\ \hline \end{array}$$

i

$$\begin{array}{r} 5. \quad 36 \\ \quad - 24 \\ \hline \end{array}$$

l

$$\begin{array}{r} 6. \quad 88 \\ \quad - 37 \\ \hline \end{array}$$

r

$$\begin{array}{r} 7. \quad 98 \\ \quad - 32 \\ \hline \end{array}$$

y

What building has the most stories?

The _____ **b** _____ .
 12 13 23 37 41 51 66

Answer Key 1. 23 2. 41 3. 37 4. 13 5. 12 6. 51 7. 66 Answer: The library

Name _____

Hundred Chart
Subtraction: make a picture

Use the hundred chart to subtract the numbers. Color in the answers to make a design!

1.
$$\begin{array}{r} 36 \\ -13 \\ \hline 23 \end{array}$$

2.
$$\begin{array}{r} 57 \\ -30 \\ \hline \end{array}$$

3.
$$\begin{array}{r} 97 \\ -55 \\ \hline \end{array}$$

4.
$$\begin{array}{r} 99 \\ -54 \\ \hline \end{array}$$

5.
$$\begin{array}{r} 68 \\ -20 \\ \hline \end{array}$$

6.
$$\begin{array}{r} 68 \\ -15 \\ \hline \end{array}$$

7.
$$\begin{array}{r} 75 \\ -11 \\ \hline \end{array}$$

8.
$$\begin{array}{r} 89 \\ -24 \\ \hline \end{array}$$

9.
$$\begin{array}{r} 89 \\ -23 \\ \hline \end{array}$$

10.
$$\begin{array}{r} 99 \\ -42 \\ \hline \end{array}$$

1	2	3	4	5	6	7	8	9	10
11	12	13	14	15	16	17	18	19	20
21	22	23	24	25	26	27	28	29	30
31	32	33	34	35	36	37	38	39	40
41	42	43	44	45	46	47	48	49	50
51	52	53	54	55	56	57	58	59	60
61	62	63	64	65	66	67	68	69	70
71	72	73	74	75	76	77	78	79	80
81	82	83	84	85	86	87	88	89	90
91	92	93	94	95	96	97	98	99	100

Answer Key 1. 23 2. 27 3. 42 4. 45 5. 48 6. 53 7. 64 8. 65 9. 66 10. 57

Name _____


I20 Chart

Solve the Riddle

Read each question. Look at the I20 chart to find the answer. Then solve the riddle.

1. What number is 1 more than 118? 119 **belt**
2. What number is 10 less than 97? _____ **did**
3. What number is 10 more than 102? _____ **eight**
4. What number is 1 less than 98? _____ **say**
5. What number is 10 more than 105? _____ **Nice**
6. What number is 1 less than 109? _____ **to**
7. What number is 10 less than 93? _____ **What**
8. What number is 1 more than 91? _____ **zero**

81	82	83	84	85	86	87	88	89	90
91	92	93	94	95	96	97	98	99	100
101	102	103	104	105	106	107	108	109	110
111	112	113	114	115	116	117	118	119	120



_____ ?
 83 87 92 97 108 112

_____ **belt** !
 115 119

Answer Key 1. 119 2. 87 3. 112 4. 97 5. 115 6. 108 7. 83 8. 92 What did zero say to eight? Nice belt!